

4-42. Problem continued from previous page.

a.

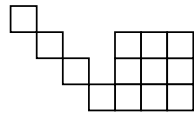
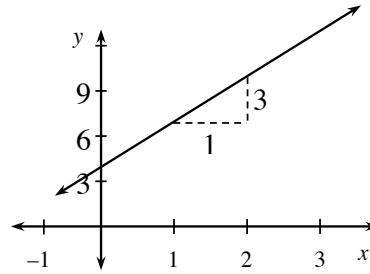
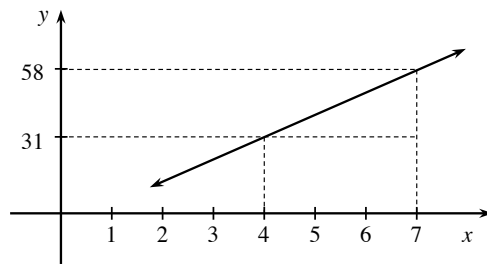


Figure 3



b.



c.

Figure Number	Number of Tiles
0	
1	
2	
3	12



Figure 8

d. $y = -3x + 7$

